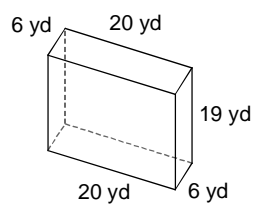


Homework #2 - Rectangular and Triangular Prisms

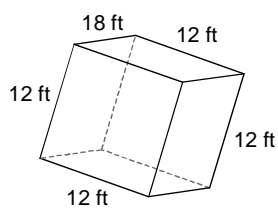
Date _____ 5A _____

Calculate the surface area and volume of each figure.

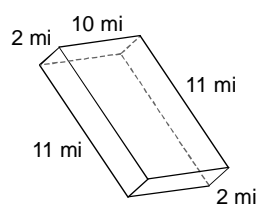
1)



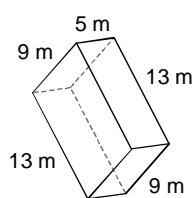
2)

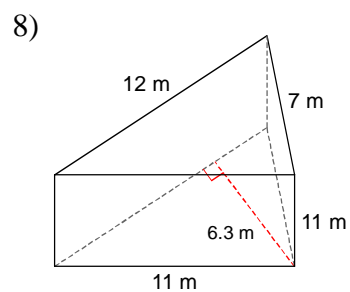
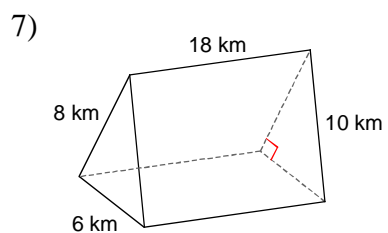
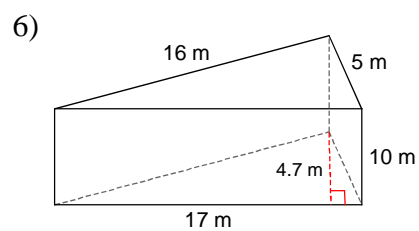
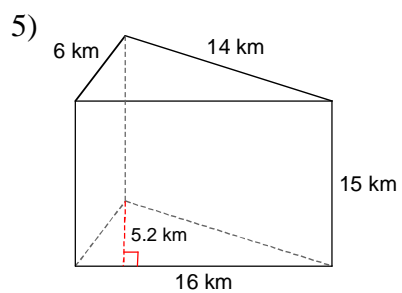


3)



4)





9. Use the appropriate formula to solve for the missing measurement:

Find the height of a triangular prism if it has length of 14ft, a base of 8 ft, and a volume of 336ft^3 .

Find the surface area and the volume of the L-Block.

10.

